


















# July Problem of the Day



SUNDAY	MONDAY	TUESDAY	WEDNESDAY	THURSDAY	FRIDAY	SATURDAY
 <p>Let's have a <b>FUN</b> July and do our best every day!</p> 			<p><b>1</b> Sam has 12 cars and Jon has 11. How many more does Sam have?</p> <input type="text"/>	<p><b>2</b> What number is less, 2 or 10?</p> <input type="text"/>	<p><b>3</b> What number is 10 less than 13?</p> <input type="text"/>	<p><b>4</b> Lily and Ben have 8 apple slices. How many can they each eat if they share equally?</p> <input type="text"/>
<p><b>5</b> There are 9 bird eggs. 2 have hatched. How many have not?</p>  <input type="text"/>	<p><b>6</b> <math>5 + 3 =</math></p> <input type="text"/>	<p><b>7</b> Find the missing number: <math>8 + ? = 17</math></p> <input type="text"/>	<p><b>8</b> What is the value of the 1 in 415?</p> <input type="text"/>	<p><b>9</b> <math>19 - 7 =</math></p> <input type="text"/>	<p><b>10</b> 8 more than 5 is equal to:</p> <input type="text"/>	<p><b>11</b> One nest has 6 eggs and another 8. How many are there altogether?</p> 
<p><b>12</b> What number is 1 less than <math>8 + 8</math>?</p> <input type="text"/>	<p><b>13</b> Find the sum of 2, 8 and 6.</p> <input type="text"/>	<p><b>14</b> You have 12 chickens and your neighbor has 7. How many do you have total?</p>  <input type="text"/>	<p><b>15</b> <math>7 + 7 + 7 =</math></p> <input type="text"/>	<p><b>16</b> What number is greater, 18 or 22?</p> <input type="text"/>	<p><b>17</b> <math>14 + 9 =</math></p> <input type="text"/>	<p><b>18</b> How many hours are in a day?</p> 
<p><b>19</b> What is the value of a quarter?</p>  <input type="text"/>	<p><b>20</b> What number is double 13?</p> <input type="text"/>	<p><b>21</b> 2 tens and 7 ones is equal to:</p> <input type="text"/>	<p><b>22</b> 2 more than 15 is equal to:</p> <input type="text"/>	<p><b>23</b> 2 more than 26 is equal to:</p> <input type="text"/>	<p><b>24</b> Ben had 20 candies but ate 9. How many are left?</p>  <input type="text"/>	<p><b>25</b> What number is in the hundreds place: 637</p> <input type="text"/>
<p><b>26</b> <math>14 + 9 =</math></p>  <input type="text"/>	<p><b>27</b> <math>30 - 1 =</math></p> <input type="text"/>	<p><b>28</b> Ben, Ann and Tom each caught 10 fish. How many did they catch in all?</p>  <input type="text"/>	<p><b>29 BONUS!</b> ★ Create your own addition problem!</p> <input type="text"/> 	<p><b>30 BONUS!</b> ★ Create your own subtraction problem!</p> <input type="text"/> 	<p><b>31 BONUS!</b> ★ Math Challenge: Write 5 numbers greater than 50.</p> <input type="text"/> 	<p><b>Great Job!</b> Keep up the amazing work!</p>  

★ Try your best, have fun, and be a math star! ★

Calendar dates source: timeanddate.com

JULY 2026

# August Problem of the Day



SUNDAY	MONDAY	TUESDAY	WEDNESDAY	THURSDAY	FRIDAY	SATURDAY
						<p>1</p> $100 - 99 =$ <input type="text"/>
<p>2 Ben has 64 LEGOs. Tom has 62. How many more does Ben have?</p> <input type="text"/>	<p>3 Complete the sequence: 12, 9, 6, ---</p> <input type="text"/>	<p>4 You have 2 apples and 2 oranges. How many pieces of fruit do you have?</p> <input type="text"/>	<p>5 What is the value of the ones place in 75?</p> <input type="text"/>	<p>6 What number is 4 more than 2?</p> <input type="text"/>	<p>7 <math>35 - 28 =</math></p> <input type="text"/>	<p>8 What number is in the tens place: 281</p> <input type="text"/>
<p>9 There are 18 birds in the yard. 9 are in the nest and the rest are flying. How many are flying?</p> <input type="text"/>	<p>10 Complete the sequence: 40, 30, 20, ---</p> <input type="text"/>	<p>11 What is the hour shown on the clock:</p> <input type="text"/>	<p>12 How much more is 16 than 4?</p> <input type="text"/>	<p>13 <math>3 + 4 + 6 =</math></p> <input type="text"/>	<p>14 <math>24 - 10 =</math></p> <input type="text"/>	<p>15 3 groups of 5 is equal to:</p> <input type="text"/>
<p>16 Find the difference between 20 and 4.</p> <input type="text"/>	<p>17 What is the value of 1 dime, 1 nickel and 2 pennies?</p> <input type="text"/>	<p>18 10 less than 28 is equal to:</p> <input type="text"/>	<p>19 A shelter had 25 dogs but 6 were adopted. How many dogs remain?</p> <input type="text"/>	<p>20 What is the value of 2 tens?</p> <input type="text"/>	<p>21 What is the difference between 28 and 7?</p> <input type="text"/>	<p>22 <math>17 + 5 =</math></p> <input type="text"/>
<p>23 7 less than 30 is equal to:</p> <input type="text"/>	<p>24 3 sisters each have 8 pieces of candy. How many do they have total?</p> <input type="text"/>	<p>25 Find the difference between 75 and 50.</p> <input type="text"/>	<p>26 <math>18 + 8 =</math></p> <input type="text"/>	<p>27 Ann spent 7 minutes putting on sunscreen and 20 minutes swimming. How long did she spend total?</p> <input type="text"/>	<p>28 10 red crayons plus 10 blue crayons plus 8 green crayons equals how many crayons?</p> <input type="text"/>	<p>29 What is the value of 1 quarter and 4 pennies?</p> <input type="text"/>
<p>30 <math>12 + 10 + 8 =</math></p> <input type="text"/>	<p>31 8 less than 39 is equal to:</p> <input type="text"/>					